



Trapezoidal Rule of Integration

NUR LAILA HAMIDAH

Capaian Pembelajaran

- Mahasiswa mampu menerapkan **metode numerik Trapezoidal Rule** untuk penyelesaian persamaan **integral tertentu**

Trapezoidal Rule of Integration

[http://numericalmethods.eng.usf.
edu](http://numericalmethods.eng.usf.edu)

What is Integration

Integration:

The process of measuring the area under a function plotted on a graph.

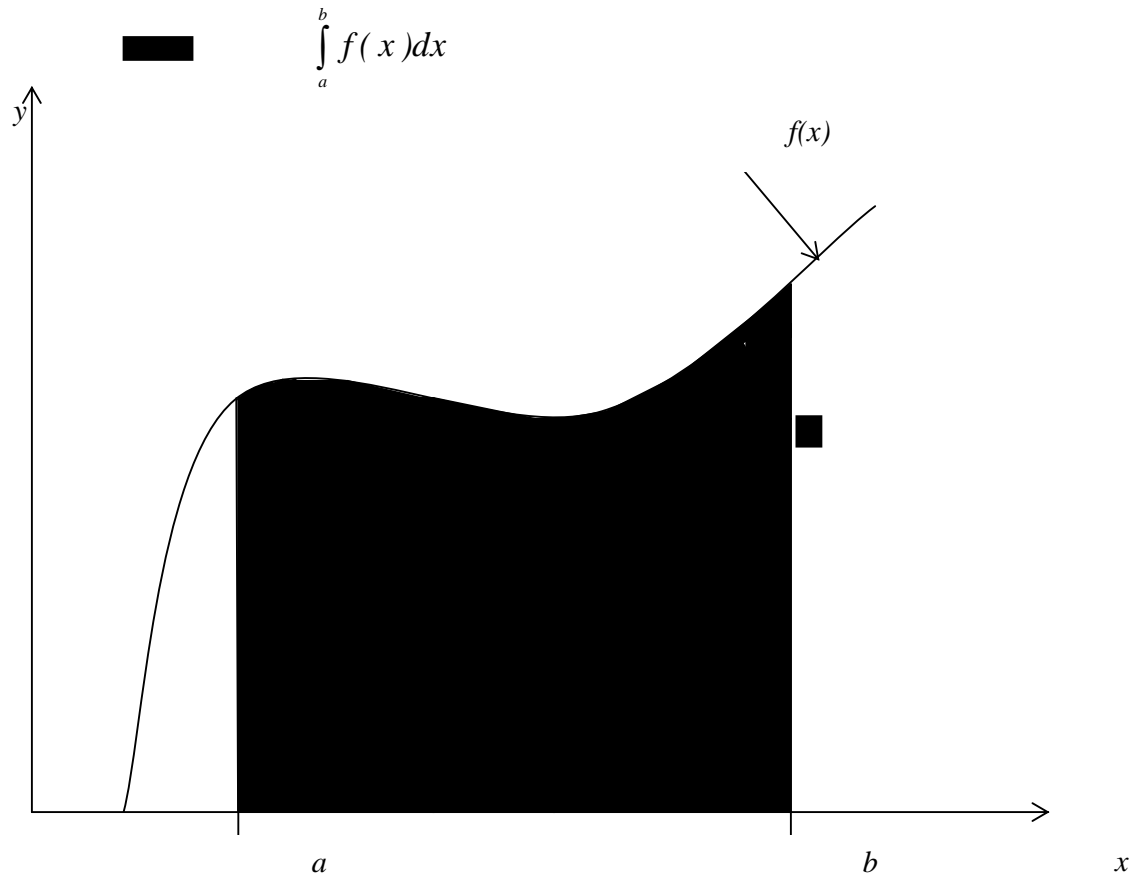
$$I = \int_a^b f(x) dx$$

Where:

$f(x)$ is the integrand

a = lower limit of integration

b = upper limit of integration



Basis of Trapezoidal Rule

Trapezoidal Rule is based on the Newton-Cotes Formula that states if one can approximate the integrand as an n^{th} order polynomial...

$$I = \int_a^b f(x) dx \quad \text{where} \quad f(x) \approx f_n(x)$$

and $f_n(x) = a_0 + a_1x + \dots + a_{n-1}x^{n-1} + a_nx^n$

Basis of Trapezoidal Rule

Then the integral of that function is approximated by the integral of that n^{th} order polynomial.

$$\int_a^b f(x) \approx \int_a^b f_n(x)$$

Trapezoidal Rule assumes $n=1$, that is, the area under the linear polynomial,

$$\int_a^b f(x) dx = (b-a) \left[\frac{f(a) + f(b)}{2} \right]$$



Derivation of the Trapezoidal Rule

Method Derived From Geometry

The area under the curve is a trapezoid.
The integral

$$\begin{aligned} \int_a^b f(x) dx &\approx \text{Area of trapezoid} \\ &= \frac{1}{2} (\text{Sum of parallel sides}) (\text{height}) \\ &= \frac{1}{2} (f(b) + f(a)) (b - a) \\ &= (b - a) \left[\frac{f(a) + f(b)}{2} \right] \end{aligned}$$

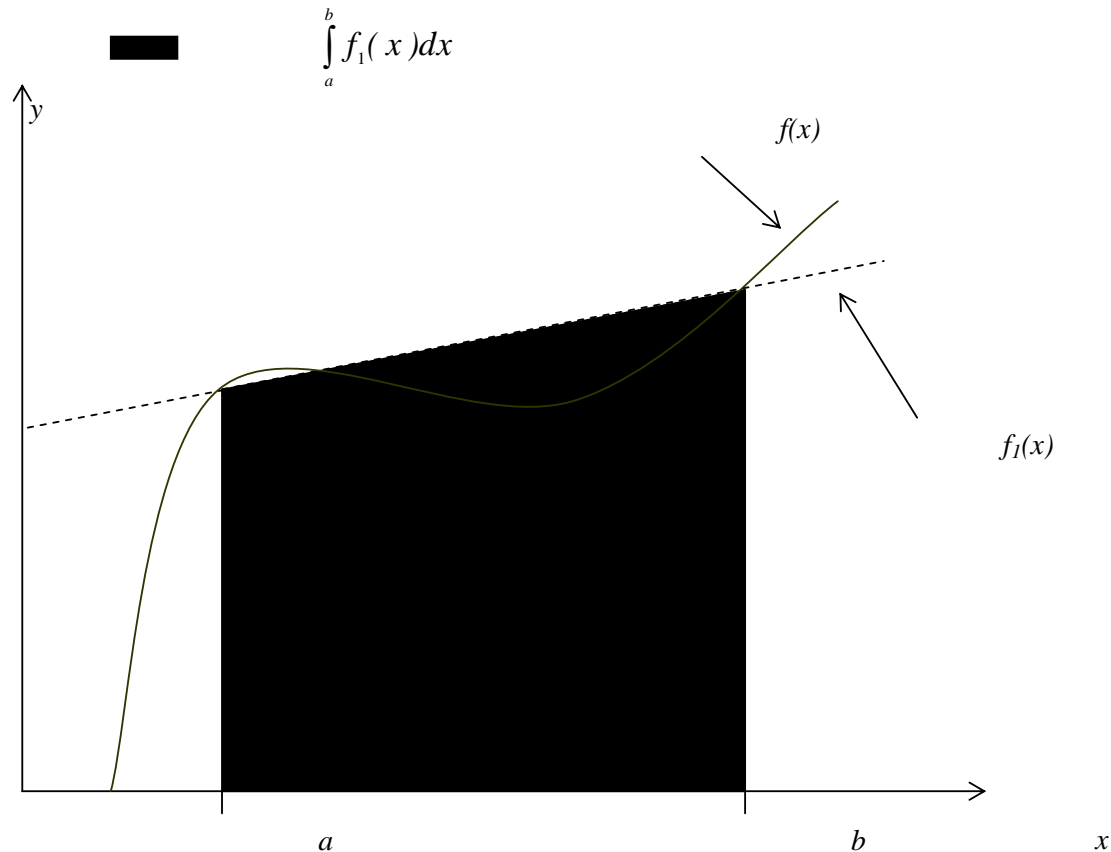


Figure 2: Geometric Representation

Example 1

The vertical distance covered by a rocket from $t=8$ to $t=30$ seconds is given by:

$$x = \int_8^{30} \left(2000 \ln \left[\frac{140000}{140000 - 2100t} \right] - 9.8t \right) dt$$

- Use single segment Trapezoidal rule to find the distance covered.
- Find the true error, E_t for part (a).
- Find the absolute relative true error, $|\epsilon_a|$ for part (a).

Solution

$$\text{a) } I \approx (b - a) \left[\frac{f(a) + f(b)}{2} \right]$$

$$a = 8 \quad b = 30$$

$$f(t) = 2000 \ln \left[\frac{140000}{140000 - 2100t} \right] - 9.8t$$

$$f(8) = 2000 \ln \left[\frac{140000}{140000 - 2100(8)} \right] - 9.8(8) = 177.27 \text{ m/s}$$

$$f(30) = 2000 \ln \left[\frac{140000}{140000 - 2100(30)} \right] - 9.8(30) = 901.67 \text{ m/s}$$

Solution (cont)

$$\begin{aligned} \text{a)} \quad I &= (30 - 8) \left[\frac{177.27 + 901.67}{2} \right] \\ &= 11868 \text{ m} \end{aligned}$$

b) The exact value of the above integral is

$$x = \int_8^{30} \left(2000 \ln \left[\frac{140000}{140000 - 2100t} \right] - 9.8t \right) dt = 11061 \text{ m}$$

Solution (cont)

b)

$$\begin{aligned} E_t &= \text{True Value} - \text{Approximate Value} \\ &= 11061 - 11868 \\ &= -807 \text{ m} \end{aligned}$$

c) The absolute relative true error, $|\epsilon_t|$, would be

$$|\epsilon_t| = \left| \frac{11061 - 11868}{11061} \right| \times 100 = 7.2959\%$$

Multiple Segment Trapezoidal Rule

In Example 1, the true error using single segment trapezoidal rule was large. We can divide the interval $[8,30]$ into $[8,19]$ and $[19,30]$ intervals and apply Trapezoidal rule over each segment.

$$f(t) = 2000 \ln\left(\frac{140000}{140000 - 2100t}\right) - 9.8t$$

$$\int_8^{30} f(t) dt = \int_8^{19} f(t) dt + \int_{19}^{30} f(t) dt$$

$$= (19 - 8) \left[\frac{f(8) + f(19)}{2} \right] + (30 - 19) \left[\frac{f(19) + f(30)}{2} \right]$$

Multiple Segment Trapezoidal Rule

With

$$f(8) = 177.27 \text{ m/s}$$

$$f(30) = 901.67 \text{ m/s}$$

$$f(19) = 484.75 \text{ m/s}$$

Hence:

$$\int_8^{30} f(t) dt = (19-8) \left[\frac{177.27 + 484.75}{2} \right] + (30-19) \left[\frac{484.75 + 901.67}{2} \right]$$

$$= 11266 \text{ m}$$

Multiple Segment Trapezoidal Rule

The true error is:

$$\begin{aligned} E_t &= 11061 - 11266 \\ &= -205 \text{ m} \end{aligned}$$

The true error now is reduced from -807 m to -205 m.

Extending this procedure to divide the interval into equal segments to apply the Trapezoidal rule; the sum of the results obtained for each segment is the approximate value of the integral.

Multiple Segment Trapezoidal Rule

Divide into equal segments as shown in Figure 4. Then the width of each segment is:

$$h = \frac{b - a}{n}$$

The integral I is:

$$I = \int_a^b f(x) dx$$

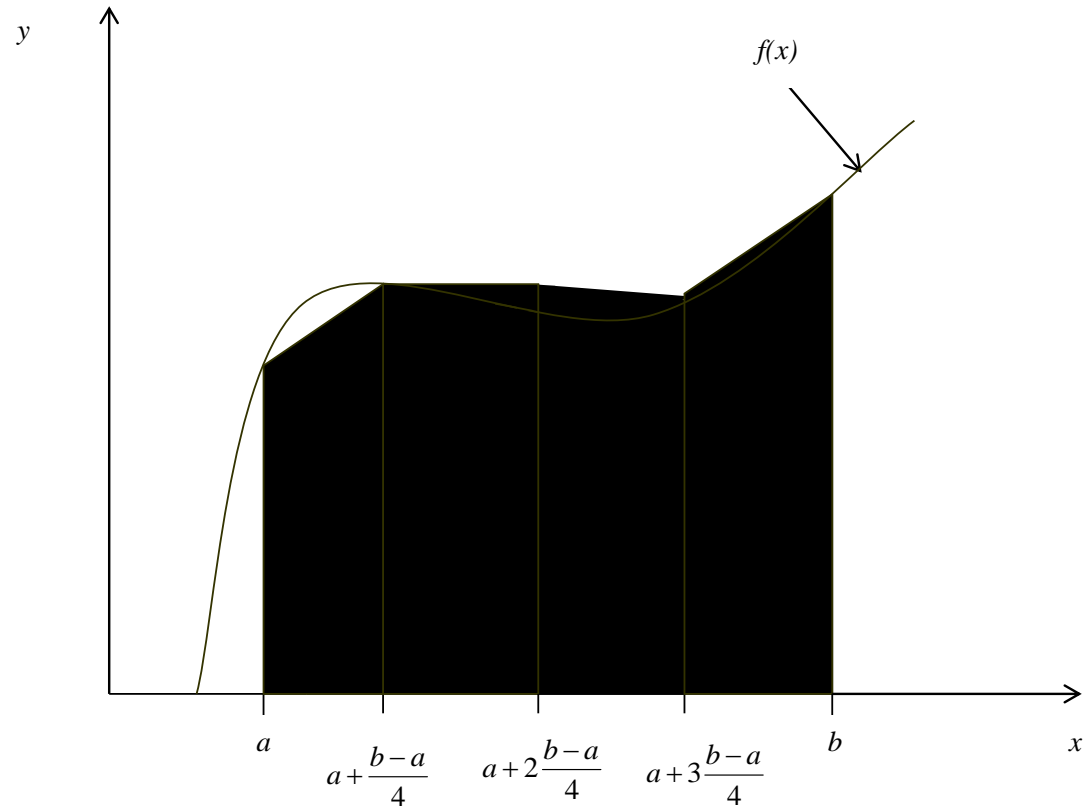


Figure 4: Multiple (n=4) Segment Trapezoidal Rule

Multiple Segment Trapezoidal Rule

The integral I can be broken into n integrals as:

$$\int_a^b f(x) dx = \int_a^{a+h} f(x) dx + \int_{a+h}^{a+2h} f(x) dx + \dots + \int_{a+(n-2)h}^{a+(n-1)h} f(x) dx + \int_{a+(n-1)h}^b f(x) dx$$

Applying Trapezoidal rule on each segment gives:

$$\int_a^b f(x) dx = \frac{b-a}{2n} \left[f(a) + 2 \left\{ \sum_{i=1}^{n-1} f(a+ih) \right\} + f(b) \right]$$

Example 2

The vertical distance covered by a rocket from $t = 8$ to $t = 30$ seconds is given by:

$$x = \int_8^{30} \left(2000 \ln \left[\frac{140000}{140000 - 2100t} \right] - 9.8t \right) dt$$

- Use two-segment Trapezoidal rule to find the distance covered.
- Find the true error, E_t for part (a).
- Find the absolute relative true error, $|\epsilon_a|$ for part (a).

Solution

a) The solution using 2-segment Trapezoidal rule is

$$I = \frac{b-a}{2n} \left[f(a) + 2 \left\{ \sum_{i=1}^{n-1} f(a+ih) \right\} + f(b) \right]$$

$$n = 2 \quad a = 8 \quad b = 30$$

$$h = \frac{b-a}{n} = \frac{30-8}{2} = 11$$

Solution (cont)

Then:

$$\begin{aligned} I &= \frac{30 - 8}{2(2)} \left[f(8) + 2 \left\{ \sum_{i=1}^{2-1} f(a + ih) \right\} + f(30) \right] \\ &= \frac{22}{4} [f(8) + 2f(19) + f(30)] \\ &= \frac{22}{4} [177.27 + 2(484.75) + 901.67] \\ &= 11266 \text{ m} \end{aligned}$$

Solution (cont)

b) The exact value of the above integral is

$$x = \int_8^{30} \left(2000 \ln \left[\frac{140000}{140000 - 2100t} \right] - 9.8t \right) dt = 11061 \text{ m}$$

so the true error is

$$\begin{aligned} E_t &= \text{True Value} - \text{Approximate Value} \\ &= 11061 - 11266 \end{aligned}$$

Solution (cont)

The absolute relative true error, $|\epsilon_t|$, would be

$$|\epsilon_t| = \left| \frac{\text{True Error}}{\text{True Value}} \right| \times 100$$

$$= \left| \frac{11061 - 11266}{11061} \right| \times 100$$

$$= 1.8534\%$$

Solution (cont)

Table 1 gives the values obtained using multiple segment Trapezoidal rule for

$$x = \int_8^{30} \left(2000 \ln \left[\frac{140000}{140000 - 2100t} \right] - 9.8t \right) dt$$

Exact Value=11061 m

n	Value	E_t	 ε_t %	 ε_a %
1	11868	-807	7.296	---
2	11266	-205	1.853	5.343
3	11153	-91.4	0.8265	1.019
4	11113	-51.5	0.4655	0.3594
5	11094	-33.0	0.2981	0.1669
6	11084	-22.9	0.2070	0.09082
7	11078	-16.8	0.1521	0.05482
8	11074	-12.9	0.1165	0.03560

Table 1: Multiple Segment Trapezoidal Rule Values

Example 3

Use Multiple Segment Trapezoidal Rule to find the area under the curve

$$f(x) = \frac{300x}{1+e^x} \quad \text{from } x=0 \quad \text{to} \quad x=10$$

Using two segments, we get $h = \frac{10-0}{2} = 5$ and

$$f(0) = \frac{300(0)}{1+e^0} = 0 \quad f(5) = \frac{300(5)}{1+e^5} = 10.039 \quad f(10) = \frac{300(10)}{1+e^{10}} = 0.136$$

Solution

Then:

$$\begin{aligned} I &= \frac{b-a}{2n} \left[f(a) + 2 \left\{ \sum_{i=1}^{n-1} f(a+ih) \right\} + f(b) \right] \\ &= \frac{10-0}{2(2)} \left[f(0) + 2 \left\{ \sum_{i=1}^{2-1} f(0+5) \right\} + f(10) \right] \\ &= \frac{10}{4} [f(0) + 2f(5) + f(10)] = \frac{10}{4} [0 + 2(10.039) + 0.136] \\ &= 50.535 \end{aligned}$$

Solution (cont)

So what is the true value of this integral?

$$\int_0^{10} \frac{300x}{1+e^x} dx = 246.59$$

Making the absolute relative true error:

$$\begin{aligned} |\epsilon_t| &= \left| \frac{246.59 - 50.535}{246.59} \right| \times 100\% \\ &= 79.506\% \end{aligned}$$

Solution (cont)

Table 2: Values obtained using Multiple Segment Trapezoidal Rule for:

$$\int_0^{10} \frac{300x}{1+e^x} dx$$

n	Approximate Value	E_t	$ \epsilon_t $
1	0.681	245.91	99.724%
2	50.535	196.05	79.505%
4	170.61	75.978	30.812%
8	227.04	19.546	7.927%
16	241.70	4.887	1.982%
32	245.37	1.222	0.495%
64	246.28	0.305	0.124%